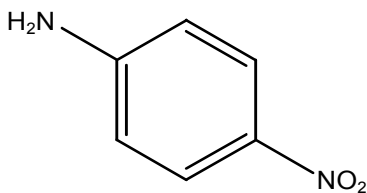
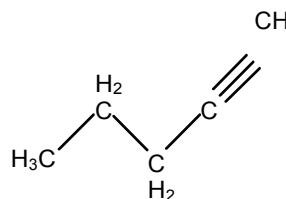
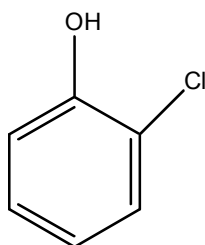
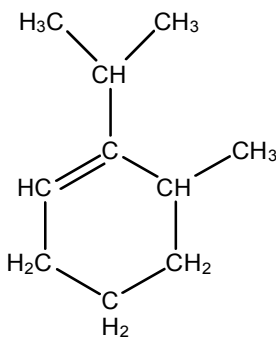
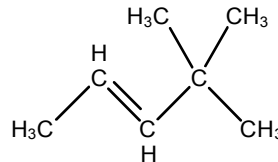
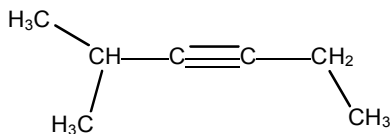
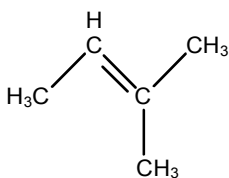


Alkene, Alkyne, and Aromatic Nomenclature Worksheet

1

1. Name the following compounds



2. Draw the following structures

2-methyl-2-hexene

trans-3-heptene

Alkene, Alkyne, and Aromatic Nomenclature Worksheet

2

2,2-dimethyl-3-hexyne

2-bromo-3,4,5-trinitro-3-hexene

Ortho-nitroaniline

4-methyl-2-phenyl-1,3-octadiene

Isopropyl benzene

cis-1,2-diiodoethene

\